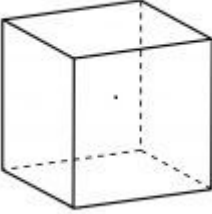
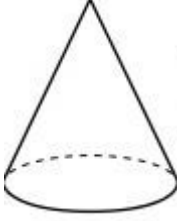
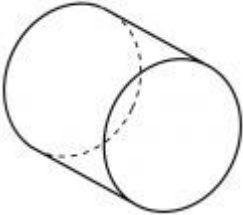
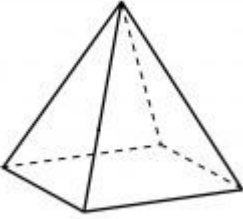
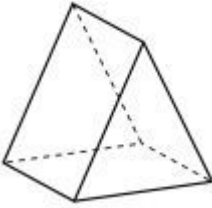
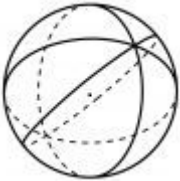
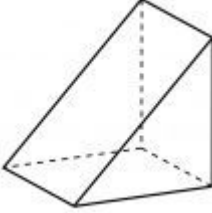
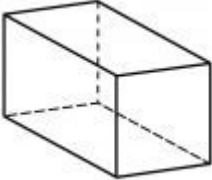
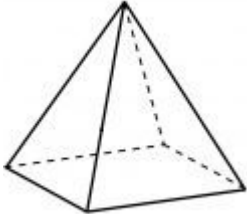
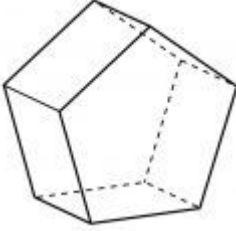
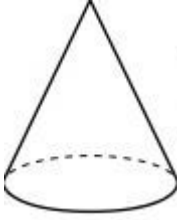
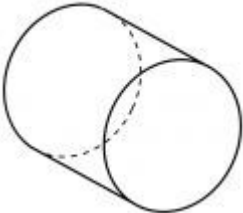


WORKSHOP / WERKSWINKEL 3/2021
GRADE / GRAAD 5 - 6

Find the correct shape from the 3 possibilities. / Identifiseer die korrekte voorwerp uit die 3 gegewe moontlike opsies.

<p>Faces/Vlakke: 6 Edges/Rante: 12 Vertices/Hoekpunte: 8</p>			
<p>Faces/Vlakke: 5 Edges/Rante: 9 Vertices/Hoekpunte: 6</p>			
<p>Faces/Vlakke: 5 Edges/Rante: 8 Vertices/Hoekpunte: 5</p>			
<p>Faces/Vlakke: 4 Edges/Rante: 6 Vertices/Hoekpunte: 4</p>			
<p>Faces/Vlakke: 7 Edges/Rante: 15 Vertices/Hoekpunte: 10</p>	