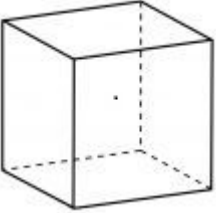
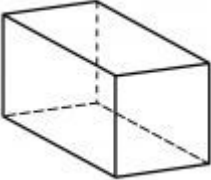
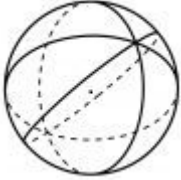
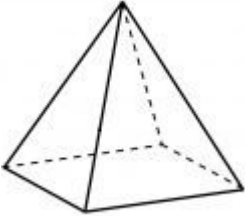
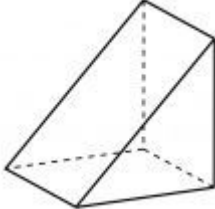
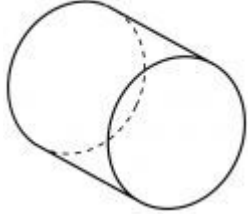
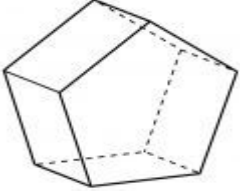
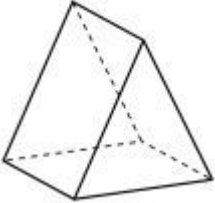
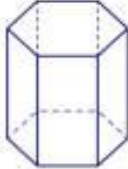


**WORKSHOP / WERKSWINKEL 3/2021**  
**GRADE / GRAAD 5 – 6**

Write down the name and number of faces for each 3-D shape below. / Skryf neer die naam en getal vlakke van elk van die 3-D voorwerpe hieronder.

		
Shape / Voorwerp	Shape / Voorwerp	Shape / Voorwerp
Faces /Vlakke	Faces /Vlakke	Faces /Vlakke
		
Shape / Voorwerp	Shape / Voorwerp	Shape / Voorwerp
Faces /Vlakke	Faces /Vlakke	Faces /Vlakke
		
Shape / Voorwerp	Shape / Voorwerp	Shape / Voorwerp
Faces /Vlakke	Faces /Vlakke	Faces /Vlakke